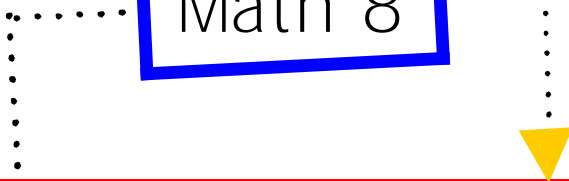



Math 8



Algebra Review



Name _____


Mrs. Faulks
Math 8

Math 8 Algebra Unit

Table of Contents

Rules of Integers	1
Expressions and Equations	2
Solving One-Step Equations	3
Solving Two-Step Equations	4
Distributive Property	5
Variables on Both Sides	6
Polynomials	7
Multiplying Monomials	8
Multiplying Binomials	9
Exponents	10
Dividing Monomials	11
Factoring	12
Inequalities	13
Vocabulary	14
Notes	15
Study Guide/Signatures	16

Rules of Integers



Addition Rules

Same Signs: _____

Different Signs: _____

Subtraction Rules

“ _____ ”

Follow the _____ rules.


Multiplication/Division Rules

Same Signs: _____

Different Signs: _____

.....

Expressions
and Equations



1. The difference between an expression and an equation is

2. Example of an Expression:

3. Example of an Equation:

.....
Solving One-Step
Equations



Write an example for each type of equation and solve it.

One-Step Addition Equation: _____

Check:

One-Step Subtraction Equation: _____

Check:


One-Step Multiplication Equation: _____

Check:

One-Step Division Equation: _____

Check:

Solving Two-Step Equations



Write an example for each type of equation and solve it.

Two-Step Multiplication Equation:

Check:

Two-Step Division Equation:

Check:

.....
Distributive
Property



Write an example of the
Distributive Property:

What helps you remember the
Distributive Property?

Variables on Both Sides



Write an example of an equation with variables on both sides and solve the equation.

Check:

.....

Polynomials

↓

What is a polynomial? _____

Write an example of a polynomial using x and y . _____

Simplify the following polynomials:

$$2x + 3y + 5y - x \quad \underline{\hspace{2cm}}$$

$$-8x + y - 5y - x \quad \underline{\hspace{2cm}}$$

$$-x - 4y - 4y + x \quad \underline{\hspace{2cm}}$$

$$2x - 2y + 2y - x \quad \underline{\hspace{2cm}}$$

$$x - 8y + 9y - 3x \quad \underline{\hspace{2cm}}$$

.....

Multiplying Monomials



When multiplying by the same base, you need to _____ the exponents.

Example: _____

Solve the following:

1. $7^2 \times 7^3 =$ _____

2. $5x(2x^2) =$ _____

3. $-4x(-4x^3) =$ _____

4. $5(n - 8) =$ _____

5. $6x(x - 3) =$ _____

.....
Multiplied Binomials



What is a binomial? _____

What does “FOIL” stand for?

Solve the following:

$3x(x + 5) =$ _____

$-4x(2x + 7) =$

$(x - 3)(x + 2) =$ _____

F	
O	
I	
L	

.....
Exponents



Complete the following table:

Base and Exponent	Fraction	Decimal
10^3		
10^2		
10^1		
10^0		
10^{-1}		
10^{-2}		
10^{-3}		

.....

Dividing Monomials



Rules:

1. If $m > n$, then
2. If $m < n$, then
3. If $m = n$, then

Examples:

1. $a^3 \div a^2 = \underline{\hspace{2cm}}$
2. $a^2 \div a^3 = \underline{\hspace{2cm}}$
3. $a^3 \div a^3 = \underline{\hspace{2cm}}$

.....

Factoring

Model: $x^2 - 5x + 6$

Answer: $(x - 3)(x - 2)$

Check: $(x - 3)(x - 2)$

F	x^2
O	$-2x$
I	$-3x$
L	6

Answer: $x^2 - 5x + 6$

Example:

Model: $x^2 - 6x + 8$

Answer:

Check:

F	
O	
I	
L	

Answer: _____

.....

Inequalities



What do the following symbols stand for?

$<$ stands for _____

$>$ stands for _____

stands for _____

stands for _____

Write an algebraic inequality for the following:

1. A number decreased by 3 is less than or equal to 2.
2. When three is subtracted from a number, the result is at most 10.
3. The product of a number and -2 is greater than 10.

Vocabulary

Binomial _____

Coefficient _____

Equation _____

Exponent _____

Expression _____

Greatest Common Factor _____

Inequality _____

Integer _____


Monomial _____

Polynomial _____

Trinomial _____

Variable _____

Notes



Page 15

.....

Signatures

↓

I studied for my Algebra Unit Test using this review book.

Student's Signature: _____

I witnessed my child studying for the Algebra Unit Test using this review book.

Parent's Signature: _____